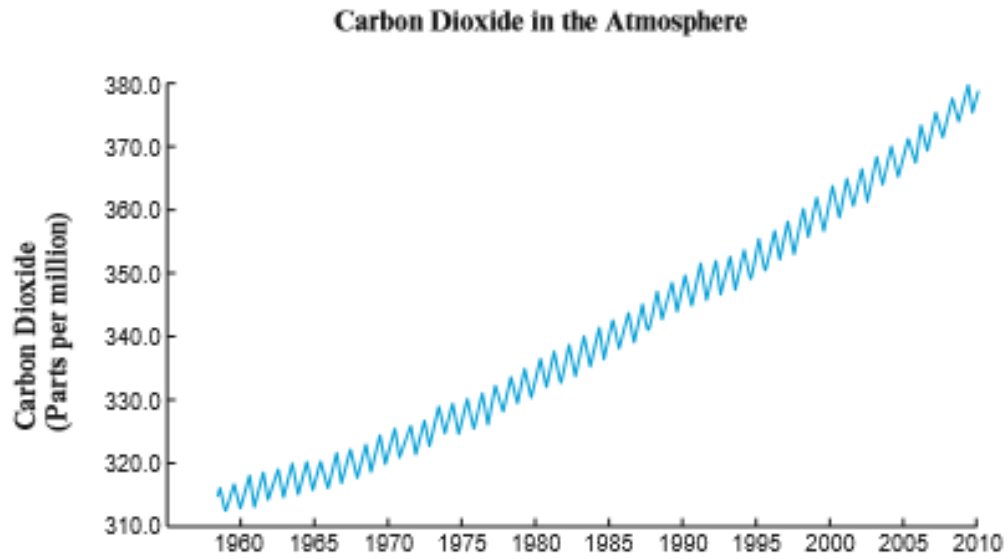


Unit 2 – Sample Revision Questions

Core Theme 5 – Weather, Climate and Ecosystems

1. (a) Study the graph below.

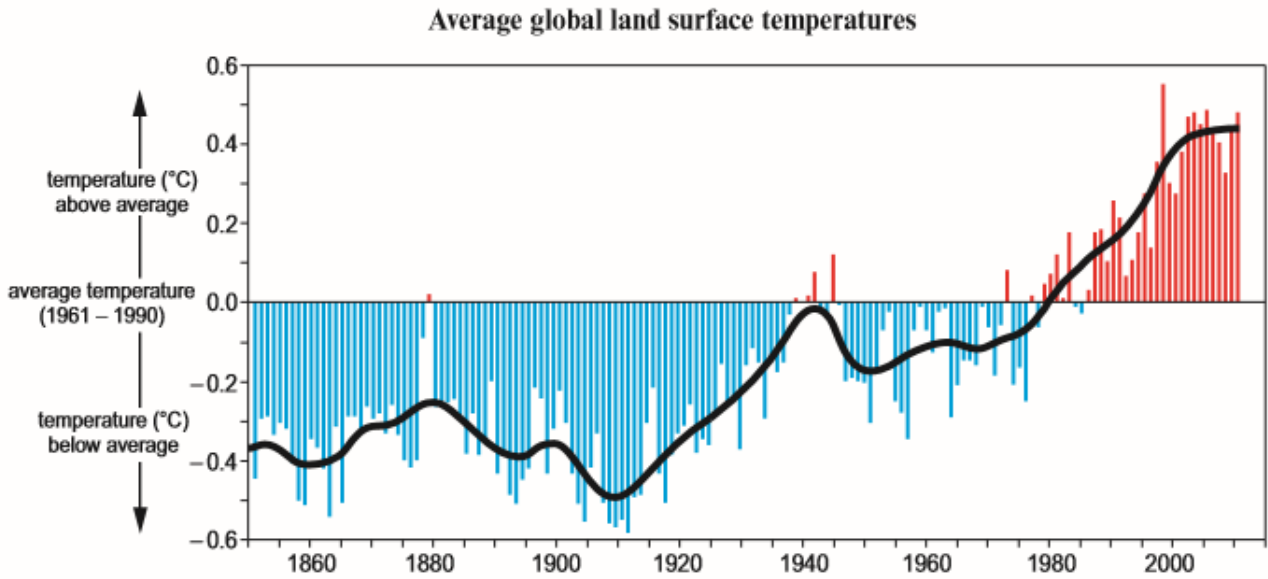


- (i) Describe the pattern of change in carbon dioxide in the atmosphere since 1960. [3]

- (ii) Give one reason to explain why the total amount of carbon dioxide has changed over time. [2]

Unit 2 – Sample Revision Questions

(b) Study the graph below.



(i) Describe the change in global temperature since 1850.

[3]

(ii) Evaluate one piece of evidence, other than the change in global temperature that supports the idea that climate change is taking place.

[2]

Unit 2 – Sample Revision Questions

2. (a) Weather hazards in the UK are associated with high and low pressure systems.

- (i) Complete the columns below by adding **two** high pressure and **two** low pressure weather hazards. [4]

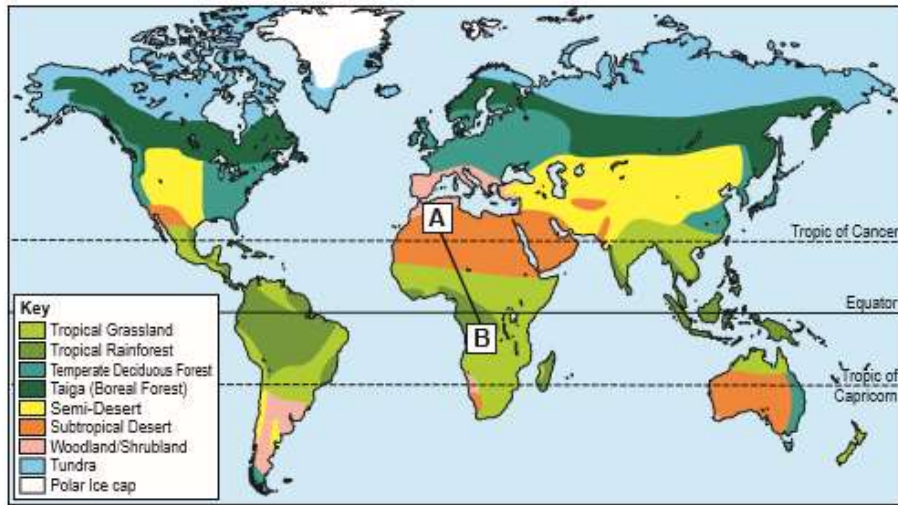
	High pressure	Low pressure
Weather hazard 1		
Weather hazard 2		

- (ii) For any **one** weather hazard you have studied describe how it can affect the natural environment. [4]

Unit 2 – Sample Revision Questions

3. (a) Study the map below which shows large scale global ecosystems called biomes.

MAJOR BIOMES OF THE WORLD



- (i) Describe the global distribution of the tropical rainforest biome. [2]

- (b) Ecosystems include both living parts and non-living parts.

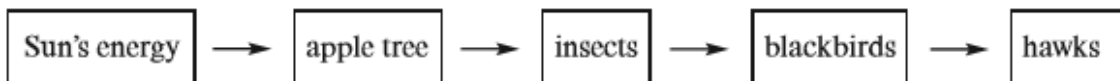
- (i) Put **four** of the following words in the correct column below. [4]

plants rainfall fox rocks plastic bottle

buildings footpath

Non-living	Living

- (ii) Study the simple food chain below.



Use this example **and your own knowledge** to explain how plants and animals depend on the sun's energy and each other in an ecosystem. [4]

Unit 2 – Sample Revision Questions

- (c) Match the following statements to show why many people argue that ecosystems like these should be protected. [4]
One has been completed for you.

Ecosystems provide people with benefits

which will create money for conservation.

Key services include plants

which can make ecosystems unsustainable.

Small scale tourist projects are developed

which can increase the numbers of plants and animals.

Ecosystems and wildlife are conserved

which can be used for medicines.

Some natural resources can be over used

which scientists describe as key services.



3. (a) For **one** ecosystem that you have studied, describe and explain **two** ways in which it can be used sustainably. [6]

Ecosystem _____

Way 1: _____

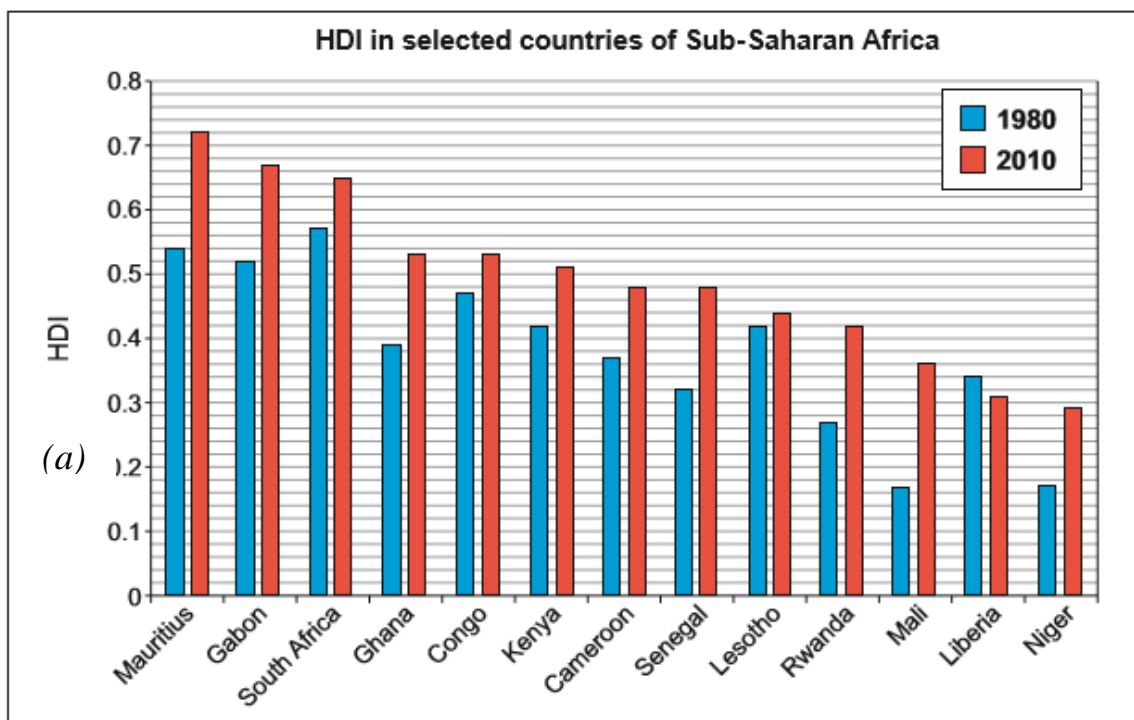
Way 2: _____

Unit 2 – Sample Revision Questions

Core Theme 6 – Development and Resource Issues

1. (a) Study the graph below.

HDI measures wealth, education and health. It is scored out of 1.0. Places with a higher score have a higher standard of living.



(i) Complete the paragraph by choosing your answers from the box below. [4]

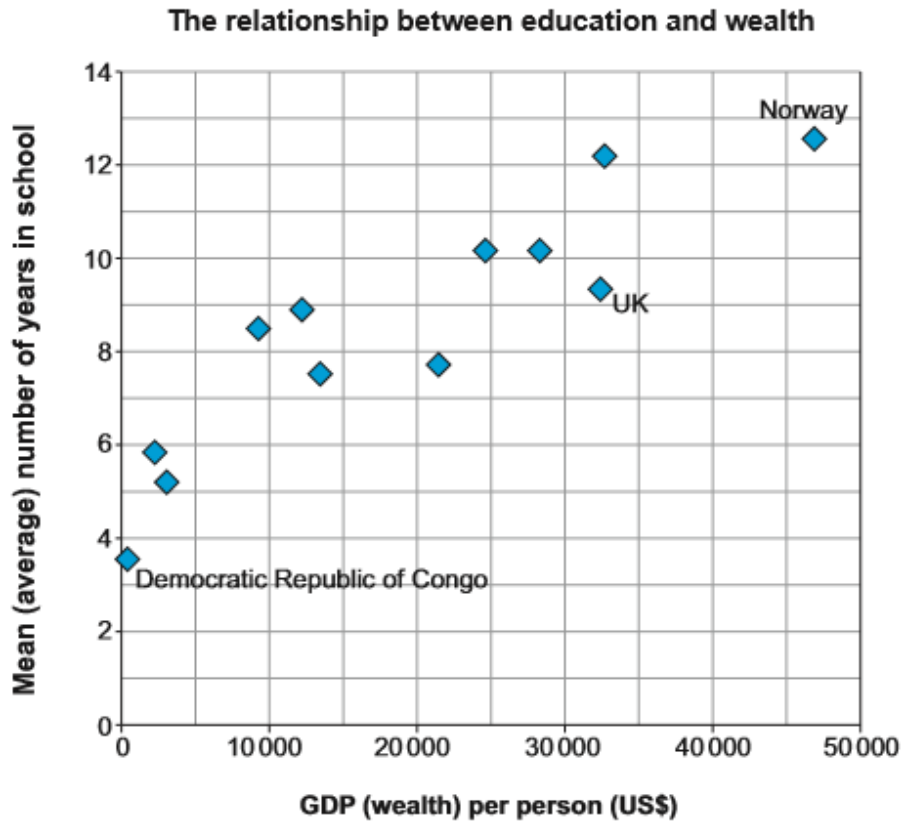
0.29	Mali	decreased	increased	2.9
Mauritius	Liberia	South Africa	0.31	Kenya

The graph shows that HDI in most Sub-Saharan countries has since 1980 but there is still a big gap between the most and least developed. In 2010, had the highest standard of living with HDI of 0.72 while the lowest was Niger with a HDI of

In, HDI has more than doubled since 1980 while in some countries such as, people are actually worse off than they were in 1980.

Unit 2 – Sample Revision Questions

(b) Study the scattergraph below. GDP per person (US\$) is a measure of a country's wealth.



(i) Add the following data to the graph. [1]

Country	GDP per person	Mean number of years in school
Namibia	6 000	6.1

(ii) Explain why improving education helps a country to develop. [3]

Unit 2 – Sample Revision Questions

- (c) Describe how one or more Aid projects that you have studied have improved people's lives. [5]

2. Study the data below.

Adult Literacy Rates (%)

	1990		2004	
	Male	Female	Male	Female
Sub-Saharan Africa	60	40	69	53

- (i) Describe the progress made by Sub-Saharan African countries to improve their Adult Literacy Rates from 1990 to 2004. [2]

- (ii) Give **one** reason why it is important for LEDC governments to improve literacy rates in their country. [2]

Unit 2 – Sample Revision Questions

3. Describe how patterns of development differ **within one** LEDC that you have studied. The words below may help you to plan your answer. [5]

Farming and food production	Jobs	Patterns of industry
Education	Urban growth	Health care and disease

The country I have studied is:

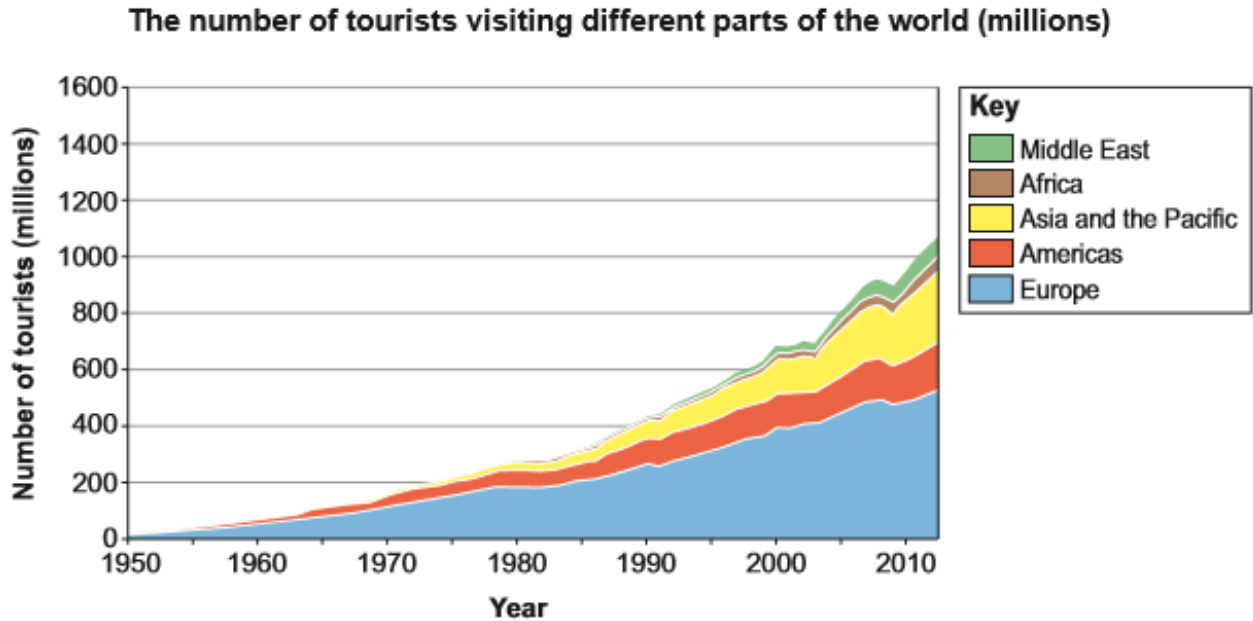
Unit 2 – Sample Revision Questions

4. Describe how regional patterns of development differ within **one** country that you have studied.
You must draw a labelled map to help your answer. [6]

Country

Unit 2 – Sample Revision Questions

5. (a) Study the graph below.



(i) Which part of the world had most tourists visiting in 2013? [1]
Underline the correct answer below.

Europe *Middle East* *Americas*

(ii) Describe the trend in tourists to Asia and the Pacific. [2]

.....

.....

(iii) Explain the overall change in tourist numbers shown on this graph. [3]

.....

.....

.....

.....

.....

.....

.....

Unit 2 – Sample Revision Questions

6. Explain how tourism can bring **disadvantages** for people and the environment. Use a located example to help your answer. [8]

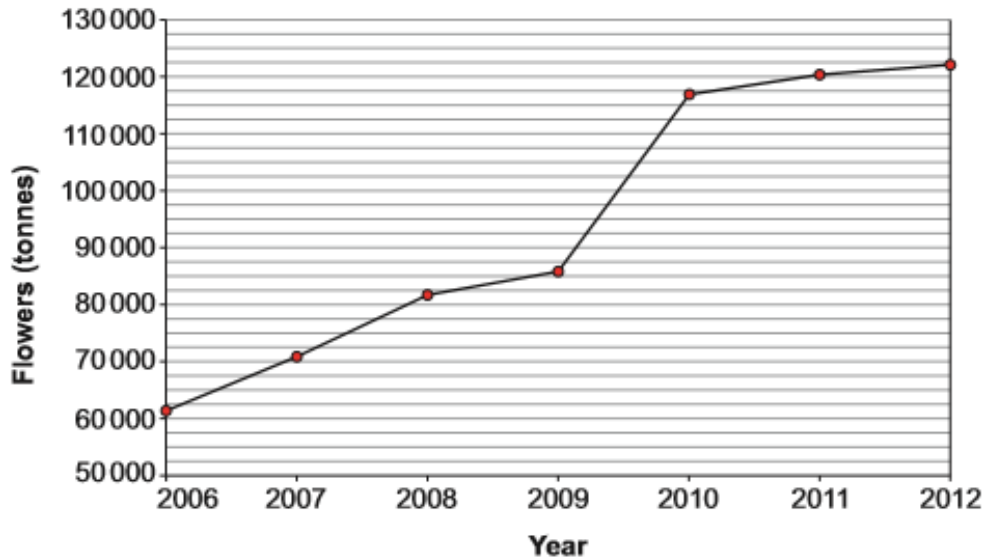
Unit 2 – Sample Revision Questions

Optional Theme 8 – Environmental Challenges

1.

(a) Study the graph below.

Weight of cut flowers grown in Kenya and sold to other countries (tonnes)



(i) What are goods sold to other countries known as?
Underline the correct answer below. [1]

imports *products* *exports*

(ii) Describe the trend shown by the graph. Use figures in your answer. [2]

(iii) Describe the advantages that this trend could have for some people living in Kenya. [3]

Unit 2 – Sample Revision Questions

2. Study the photograph below.



Energy in the Netherlands

- (i) Use the photograph only to give **one** way in which technology is being used in the Netherlands to fight climate change. [1]

- (ii) Suggest how technology like this can help to reduce the impact of climate change. [2]

- (iii) Describe **one** way in which people can change their lifestyles to help reduce the risk of climate change. [2]
