

Unit 1 – Revision Questions

Core Theme 1 – Landscape Processes

1. (a) Study the photograph below.



(i) Describe the distinctive features of the landscape shown in the photograph. [3]

(ii) Explain why the area labelled X is unsuitable for building houses. [3]

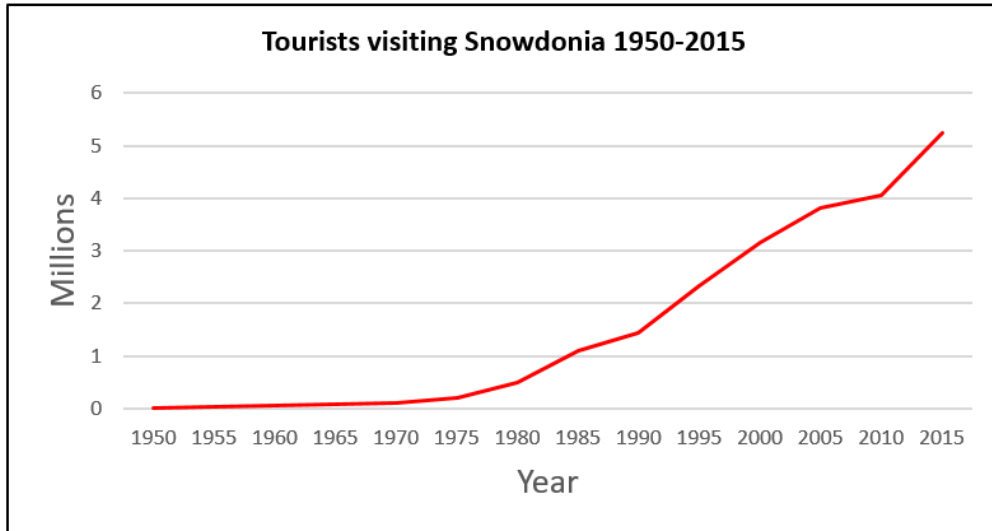
(iii) Name and describe one process by which a river **erodes** its load. [2]

Name: _____

Description: _____

Unit 1 – Revision Questions

(d) Study the graph below.



(ii) Describe the change in visitor numbers to Snowdonia from 1950 to 2015. [3]

(i) Suggest reasons for this change in visitor numbers to Snowdonia. [3]

(e) Study the photographs below.

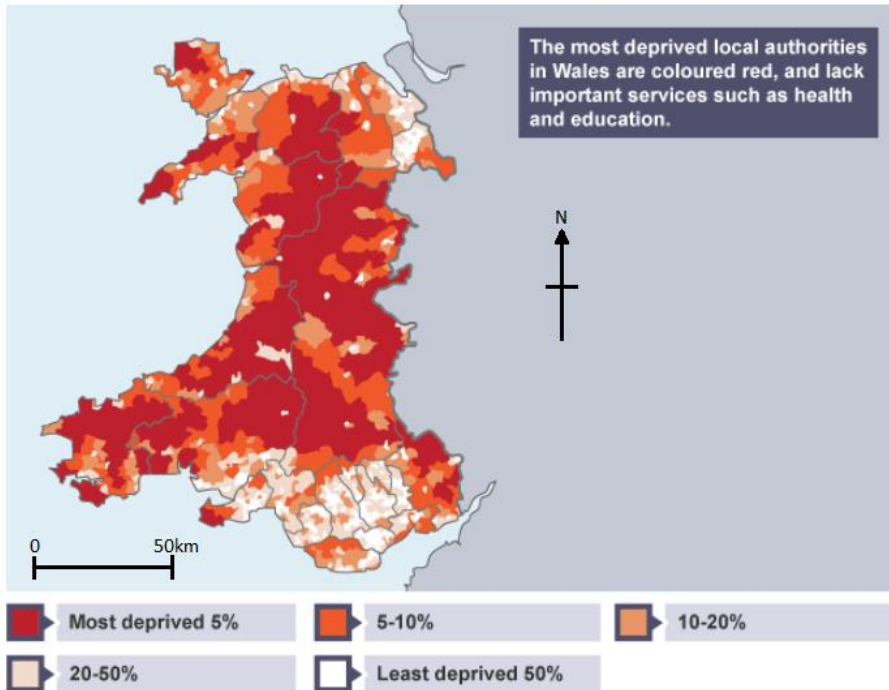


(i) Describe **two** issues created by changing visitor numbers to a distinctive landscape in Wales. [3]

Unit 1 – Revision Questions

Core Theme 2 – Rural-Urban Links

2. (a) Study the map below.



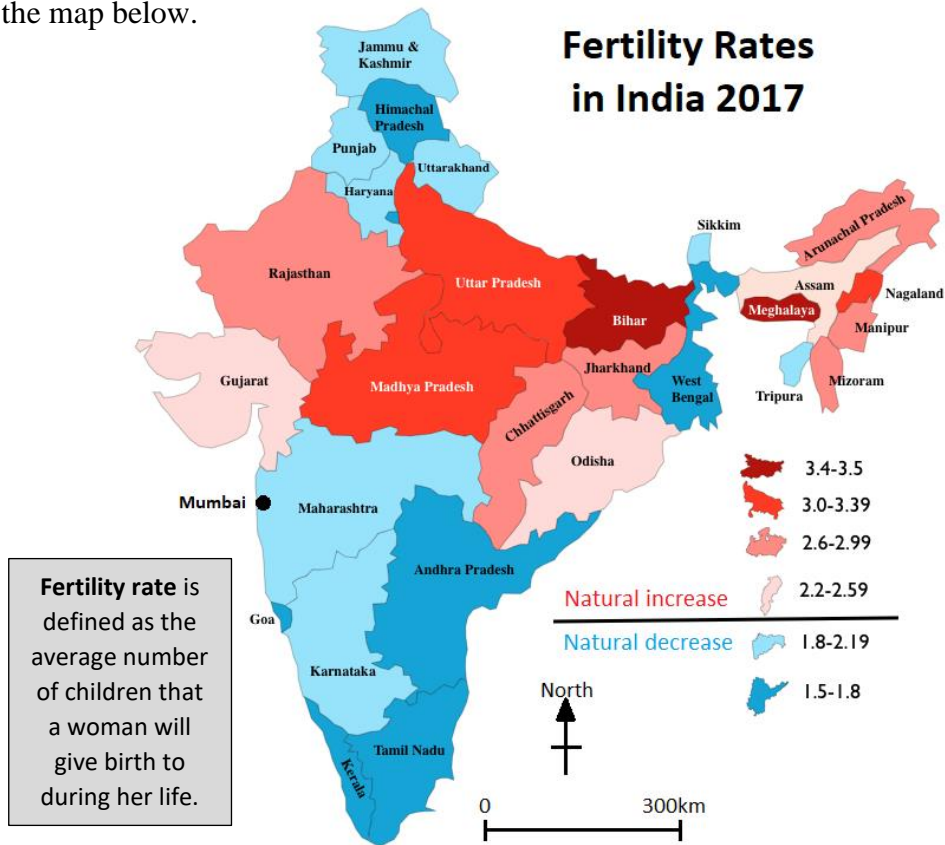
(i) Describe the pattern of most and least deprived areas in Wales. [4]

(ii) Explain what is meant by the term **deprivation**. [2]

(iii) What are the causes of deprivation in the areas marked in red on the map? [3]

Unit 1 – Revision Questions

(c) Study the map below.



(i) Complete the paragraph below by adding answers from the box. [4]

urbanisation	2	south	centre	Rajasthan
2.19	north-west	Bihar	Migration	2.5

The map shows that areas in the of India generally have lower fertility rates. The two areas with the highest fertility rates are Meghalaya and states. A fertility rate of above is required for the population of a state to naturally increase. However, cities such as Mumbai have an increasing population despite a low fertility rate. This is due to from more rural areas in the north of India.

(ii) Explain why Mumbai attracts people from all over India. [4]

Unit 1 – Revision Questions

(d) Study the photographs below.



- (i) Why are people increasingly choosing to shop online? [2]

- (ii) Explain why many shops are now being built in out of town developments. [3]

- (iii) Examine the impact that online and out of town shopping are having on traditional town centres. [5]


Unit 1 – Revision Questions

(b) Explain how the following factors can affect the vulnerability of people living near to plate boundaries. [4]

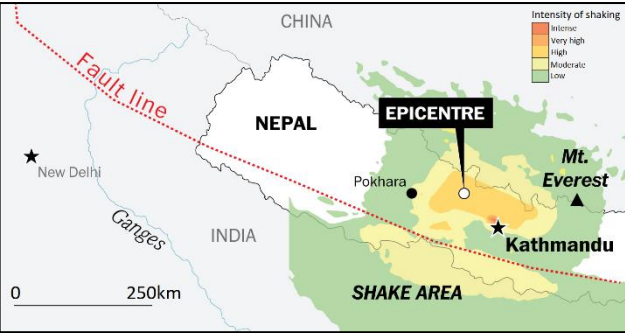
(i) Population density:


(ii) The level of development of the area:

(c) Look at the information below illustrating some of the impacts of the 2015 Nepal earthquake.



Damaged shops in Pote Bazaar






Major roads damaged in central Kathmandu

Nepal Earthquake April 2015

- Magnitude = 7.8 on Richter scale
- Over 9,000 deaths
- 600,000 homes destroyed
- Major roads and bridges damaged
- Villages cut off
- Kathmandu hospital destroyed
- Electricity and water supplies fail



Houses and slums destroyed

(i) Describe the range of **economic** effects of the earthquake. [3]
